


Name: \_\_\_\_\_ Date: \_\_\_\_\_

# Pizza Fractions

Use the pizza menu below to answer the following questions. Use standard fractional notation.



How many slices of pizza have pepperoni?

How many slices of pizza have peppers?

How many slices of pizza have bacon?

How many slices of pizza have pineapple?

<input type="text"/>
<input type="text"/>
<input type="text"/>
<input type="text"/>

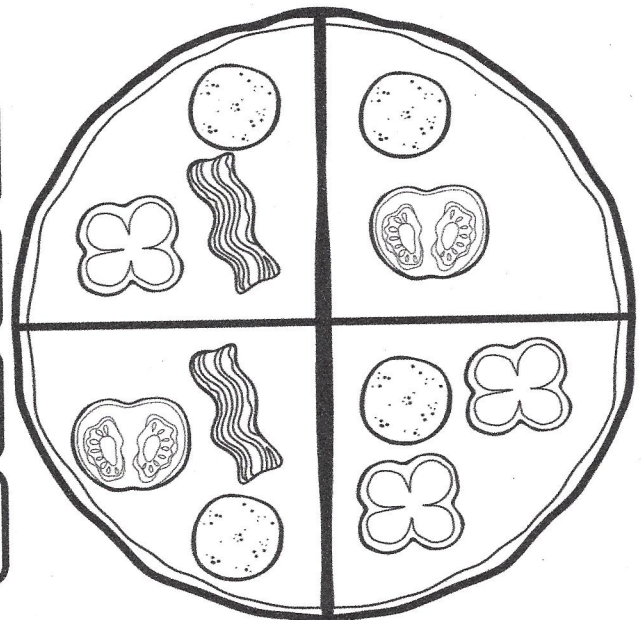
How many slices of pizza have pepperoni?

How many slices of pizza have peppers?

How many slices of pizza have bacon?

How many slices of pizza have tomatoes?

<input type="text"/>
<input type="text"/>
<input type="text"/>
<input type="text"/>



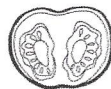
## Pizza Topping Guide



pepperoni



pineapple



tomato



mushroom



pepper



bacon



onion

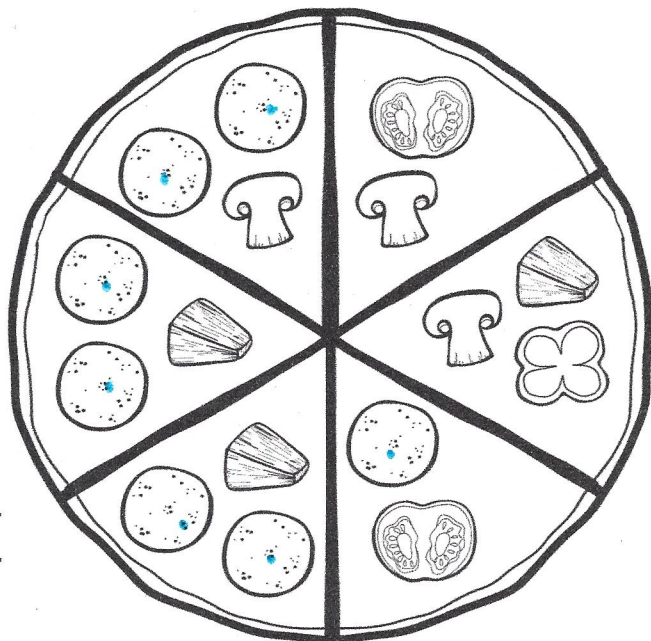


olive

Name: \_\_\_\_\_ Date: \_\_\_\_\_

# Pizza Fractions

Use the pizza menu below to answer the following questions. Use standard fractional notation.



How many slices of pizza have pepperoni?

$\frac{4}{6}$

How many slices of pizza have peppers?

How many slices of pizza have mushrooms?


How many slices of pizza have pineapple?

How many slices of pizza have bacon?

How many slices of pizza have onions?

How many slices of pizza have mushrooms?

How many slices of pizza have tomatoes?



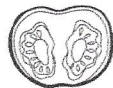
## Pizza Topping Guide



pepperoni



pineapple



tomato



mushroom



pepper



bacon



onion



olive