

Name: _____

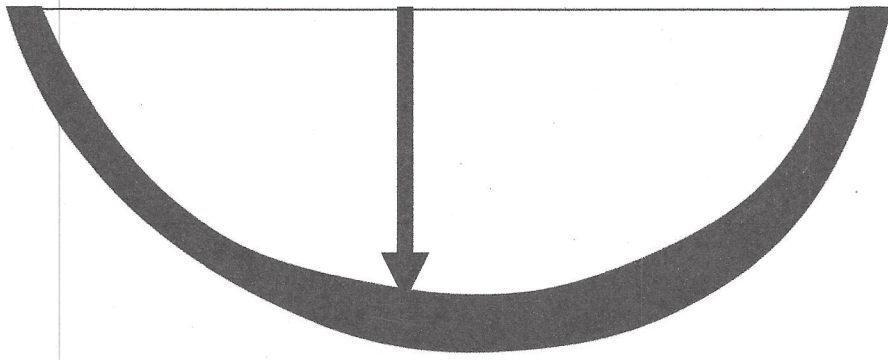
DIRECTIONS: Measure 10 things in feet using a yard stick. Record estimate and actual measurement.

or measuring tape or use your foot template on the next 2 pages.

WHAT	ESTIMATE	MEASUREMENT

DIRECTIONS: Cut out foot and use it to measure different things in the room in feet. Record findings on the template.

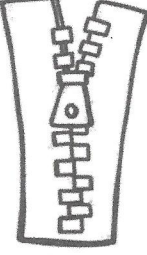






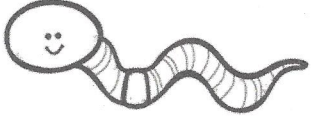
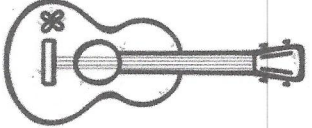






1 foot =
12 inches



DIRECTIONS: Cut out foot and use it to measure different things in the room in feet. Record findings on the template.

Name: _____

DIRECTIONS: Circle the unit that should be used to correctly measure each object (centimeters or meters, or inches or feet).

cm or m 	cm or m 	cm or m 	cm or m 
cm or m 	cm or m 	cm or m 	cm or m 
in or ft 	in or ft 	in or ft 	in or ft 
in or ft 	in or ft 	in or ft 	in or ft 